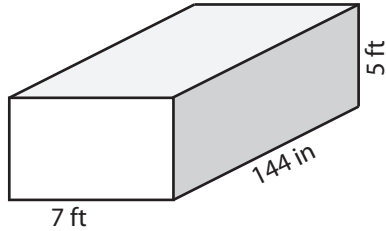


Volume - Rectangular Prisms

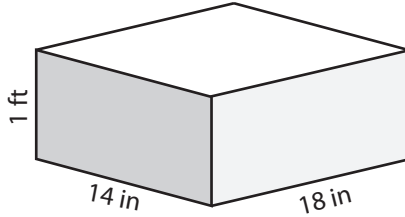
Find the volume of each rectangular prism.

1)



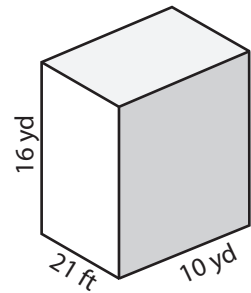
Volume = _____ ft^3

2)



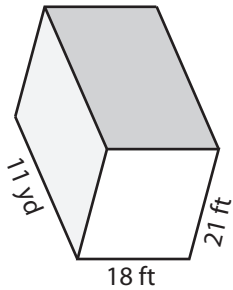
Volume = _____ in^3

3)



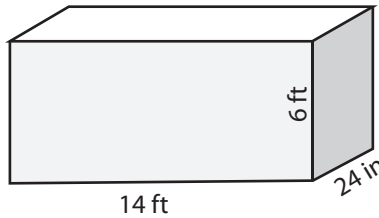
Volume = _____ yd^3

4)



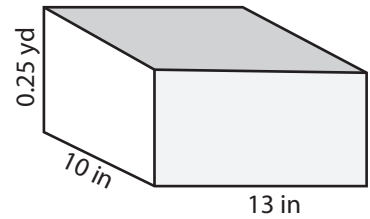
Volume = _____ yd^3

5)



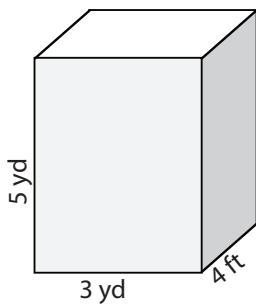
Volume = _____ ft^3

6)



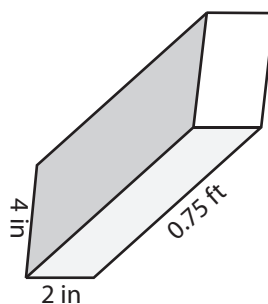
Volume = _____ in^3

7)



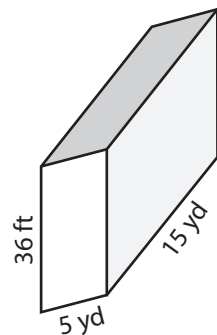
Volume = _____ ft^3

8)



Volume = _____ in^3

9)



Volume = _____ yd^3