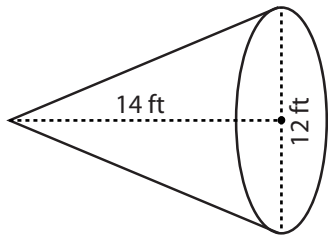


**Volume - Cones**

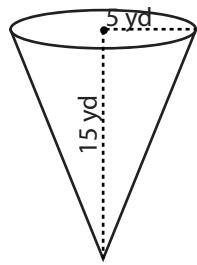
Find the exact volume of each cone.

1)



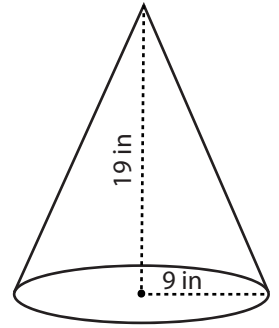
Volume = \_\_\_\_\_

2)



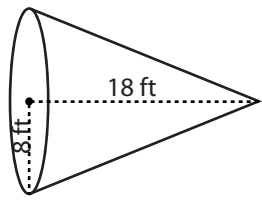
Volume = \_\_\_\_\_

3)



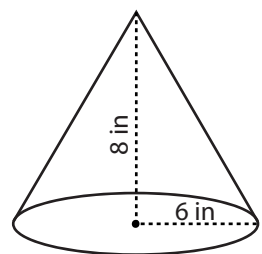
Volume = \_\_\_\_\_

4)



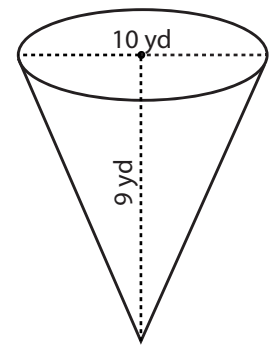
Volume = \_\_\_\_\_

5)



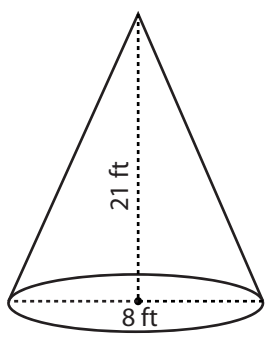
Volume = \_\_\_\_\_

6)



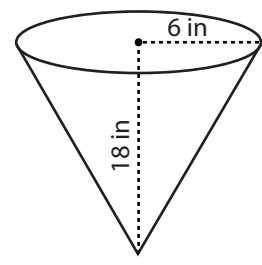
Volume = \_\_\_\_\_

6)



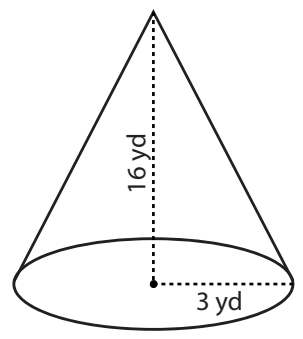
Volume = \_\_\_\_\_

7)



Volume = \_\_\_\_\_

8)



Volume = \_\_\_\_\_