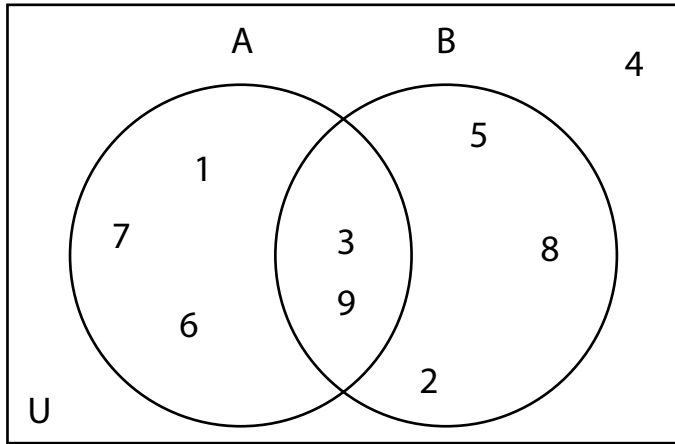
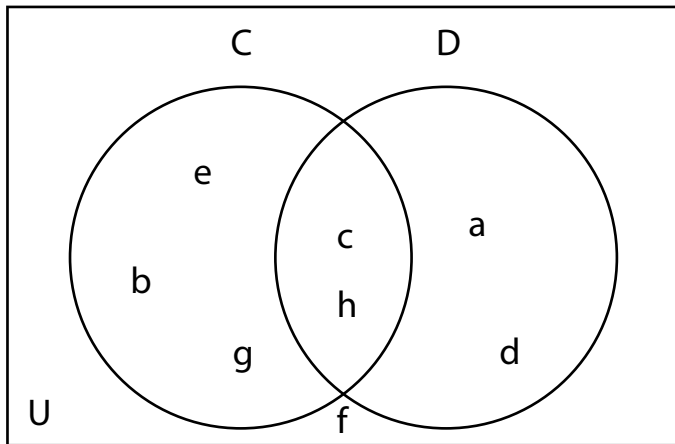


Venn Diagram

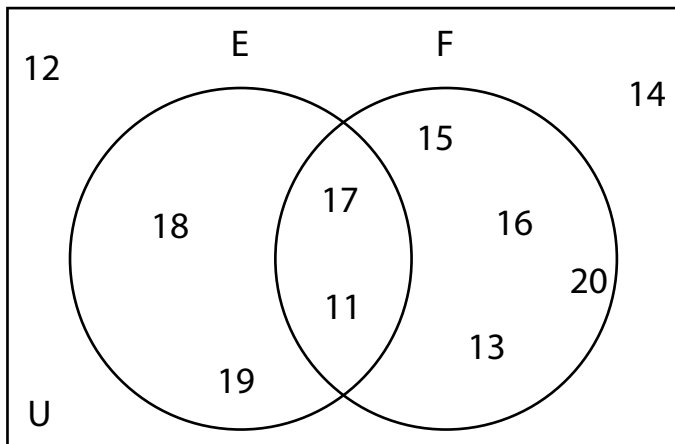
Fill in the blanks using the given Venn diagrams.



$A' \cup B' =$ _____
 $A' \cap B' =$ _____
 $(A \cup A)' =$ _____
 $(B \cap B)' =$ _____



$C' - D =$ _____
 $D' - C =$ _____
 $(C - D)' =$ _____
 $(D - C)' =$ _____



$(E \cup F)' =$ _____
 $(E \cap F)' =$ _____
 $E' \cup F =$ _____
 $E' \cap F =$ _____