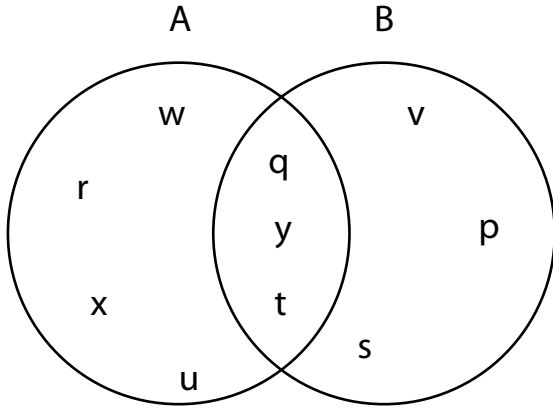
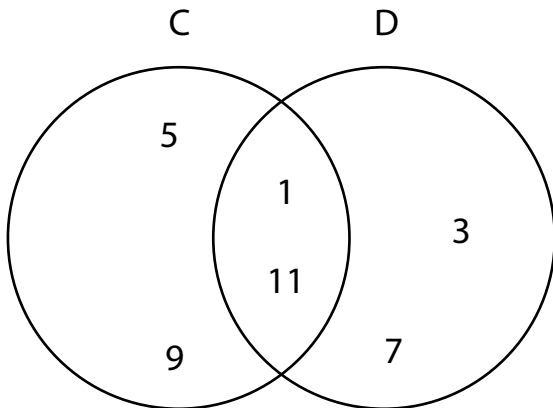


# Venn Diagram

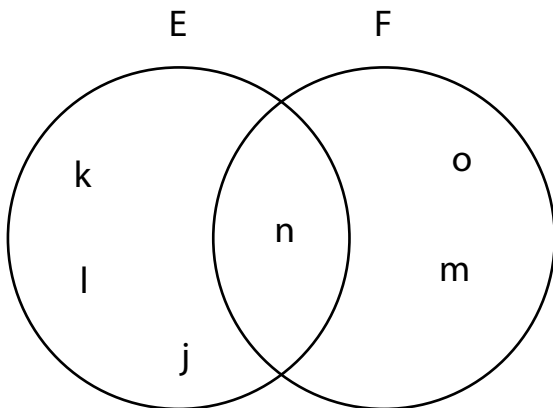
Fill in the blanks using the given Venn diagrams.



$A \cup B =$  \_\_\_\_\_  
 $A \cap B =$  \_\_\_\_\_  
 $A - B =$  \_\_\_\_\_  
 $B - A =$  \_\_\_\_\_



$C \cup D =$  \_\_\_\_\_  
 $C \cap D =$  \_\_\_\_\_  
 $C - D =$  \_\_\_\_\_  
 $D - C =$  \_\_\_\_\_



$E \cup F =$  \_\_\_\_\_  
 $E \cap F =$  \_\_\_\_\_  
 $E - F =$  \_\_\_\_\_  
 $F - E =$  \_\_\_\_\_