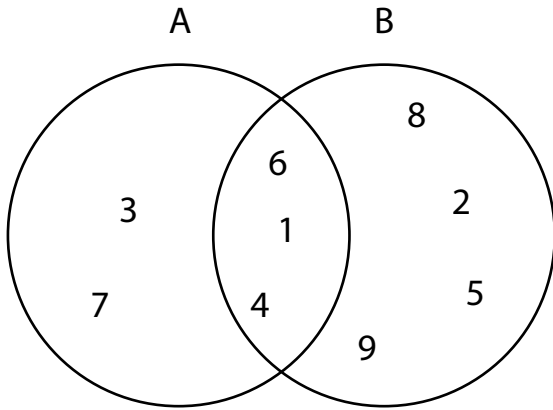
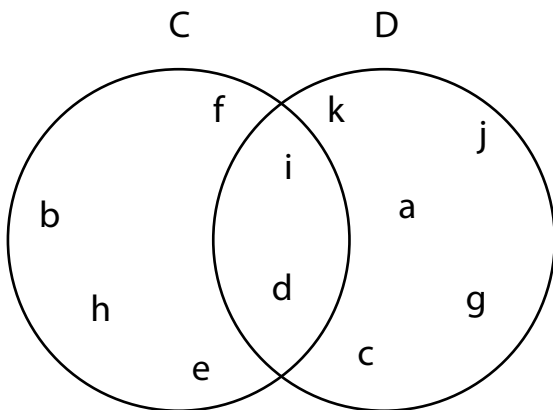


Venn Diagram

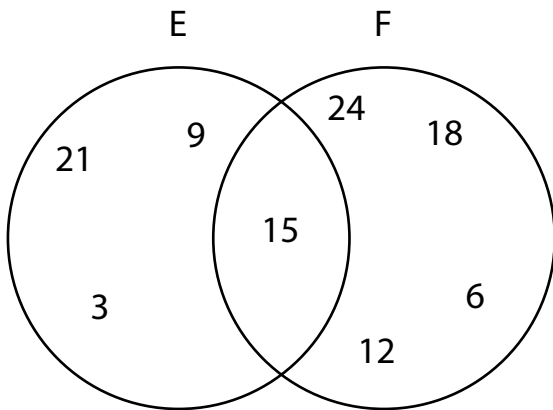
Fill in the blanks using the given Venn diagrams.



$A \cup B =$ _____
 $A \cap B =$ _____
 $A - B =$ _____
 $B - A =$ _____



$C \cup D =$ _____
 $C \cap D =$ _____
 $C - D =$ _____
 $D - C =$ _____



$E \cup F =$ _____
 $E \cap F =$ _____
 $E - F =$ _____
 $F - E =$ _____