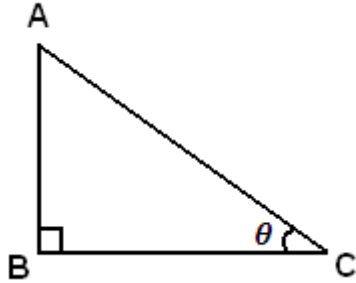


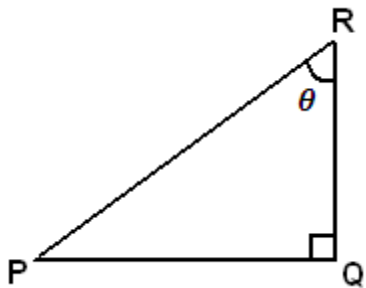
Trigonometric Ratios



The leg opposite to θ is _____

The leg adjacent to θ is _____

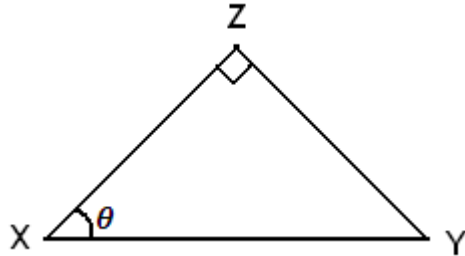
The hypotenuse is _____



The leg opposite to θ is _____

The leg adjacent to θ is _____

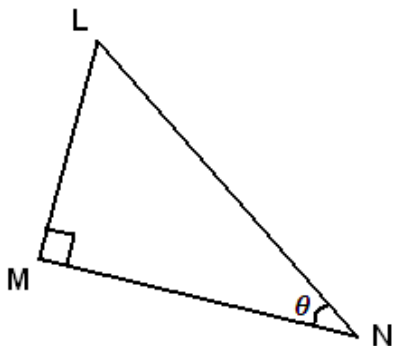
The hypotenuse is _____



The leg opposite to θ is _____

The leg adjacent to θ is _____

The hypotenuse is _____



The leg opposite to θ is _____

The leg adjacent to θ is _____

The hypotenuse is _____