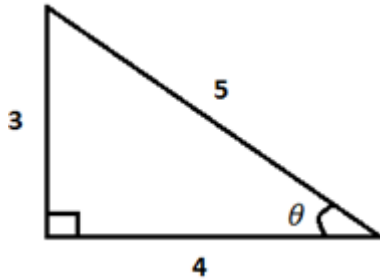


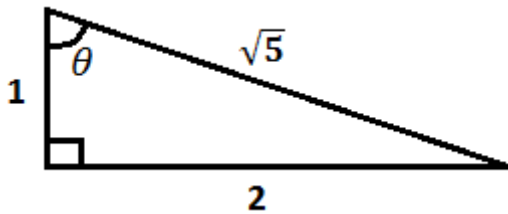
Trigonometric Ratios



The length of the opposite leg is _____

The length of the adjacent leg is _____

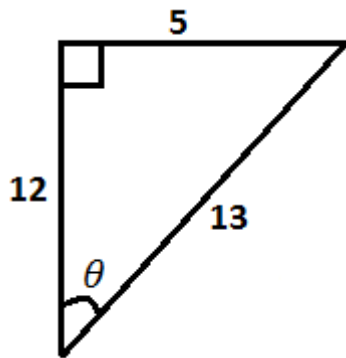
The length of the hypotenuse is _____



The length of the opposite leg is _____

The length of the adjacent leg is _____

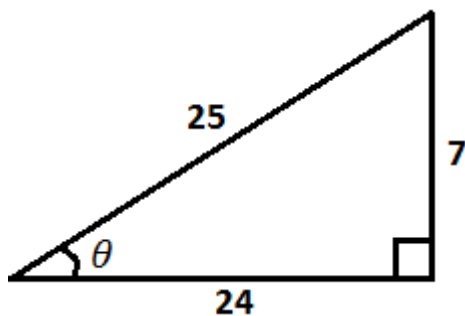
The length of the hypotenuse is _____



The length of the opposite leg is _____

The length of the adjacent leg is _____

The length of the hypotenuse is _____



The length of the opposite leg is _____

The length of the adjacent leg is _____

The length of the hypotenuse is _____