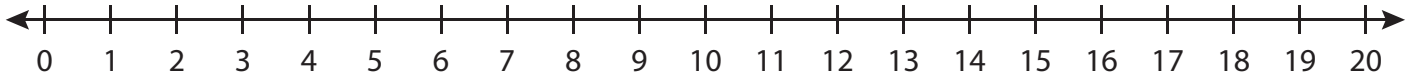


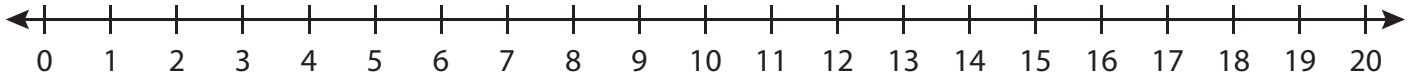
Number Line Subtraction

Indicate hops on each number line and complete the subtraction sentences.

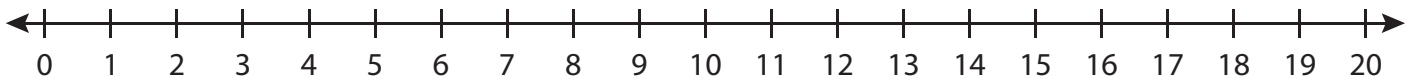
1) $20 - 11 = \underline{\quad}$



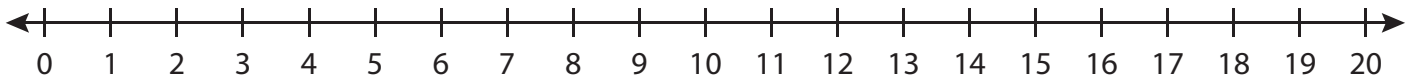
2) $13 - 8 = \underline{\quad}$



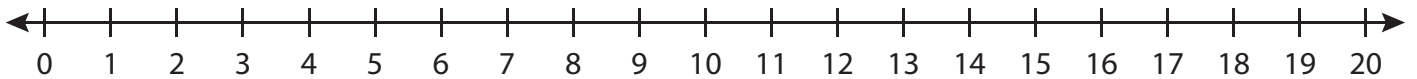
3) $19 - 2 = \underline{\quad}$



4) $6 - 6 = \underline{\quad}$



5) $17 - 10 = \underline{\quad}$



6) $12 - 9 = \underline{\quad}$

