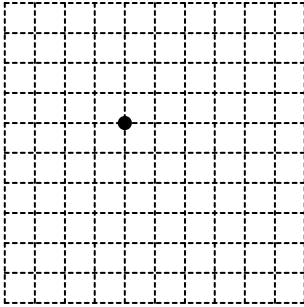


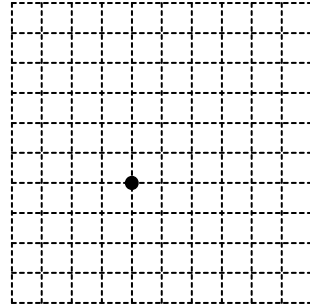
Slope

Draw a line through the point with the given slope.

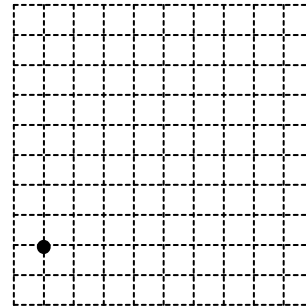
1) Slope =  $-\frac{2}{3}$




2) Slope =  $\frac{1}{5}$



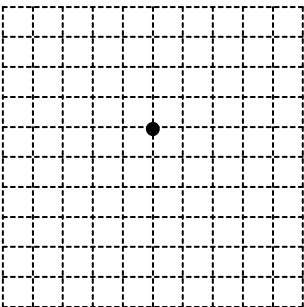
3) Slope =  $\frac{3}{8}$



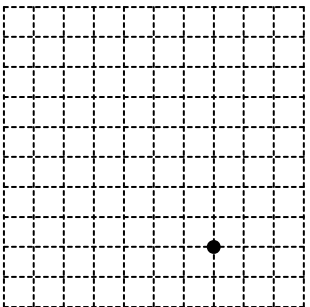
4) Slope = 0



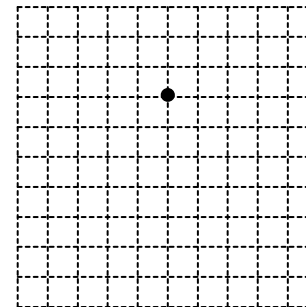
5) Slope = Undefined



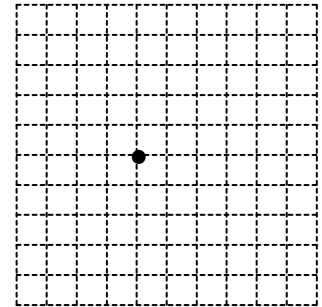
6) Slope =  $-\frac{7}{5}$



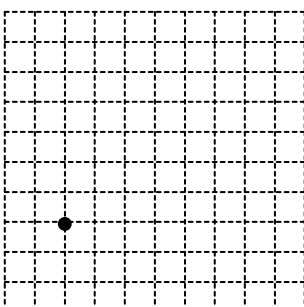
7) Slope =  $\frac{1}{3}$



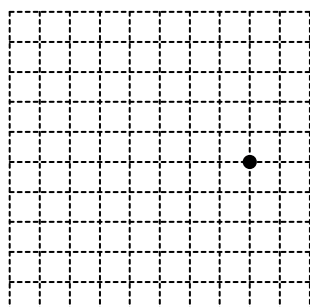
8) Slope =  $-\frac{4}{3}$



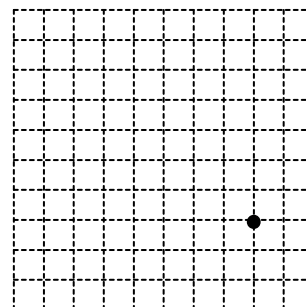
9) Slope =  $\frac{3}{7}$



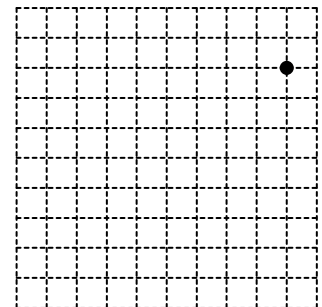
10) Slope = 0



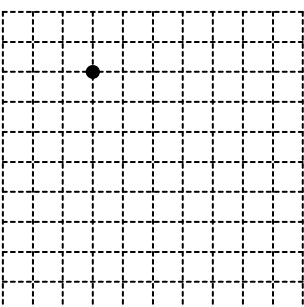
11) Slope =  $-\frac{4}{7}$



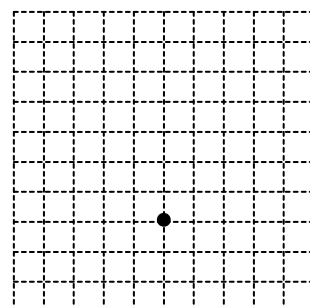
12) Slope = Undefined



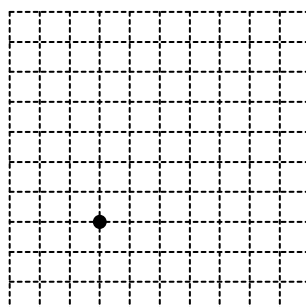
13) Slope = 0



14) Slope = -3



15) Slope = Undefined



16) Slope =  $\frac{2}{5}$

