




1) Count by 10s and write how many onions there are in total.




10



20





2) Count by 7s and write how many pearls there are.















3) Count by 9s and write how many marbles there are altogether.

