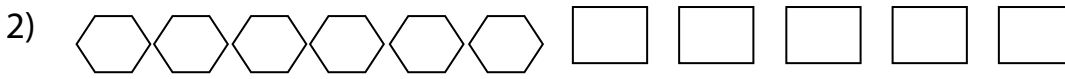


Ratio | Part to Part

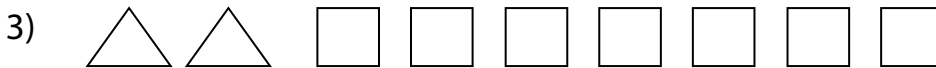
Find the part-to-part ratio.



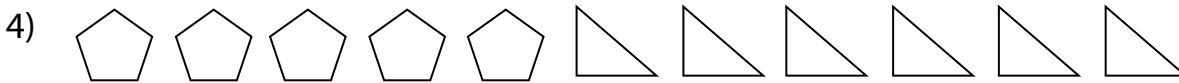
Ratio of circles to triangles is _____.



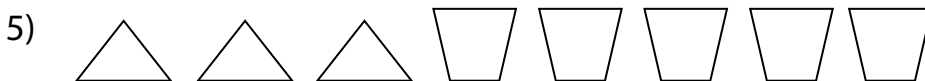
Ratio of hexagons to rectangles is _____.



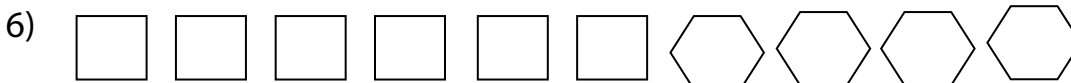
Ratio of triangles to squares is _____.



Ratio of pentagons to triangles is _____.



Ratio of triangles to trapezoids is _____.



Ratio of squares to hexagons is _____.