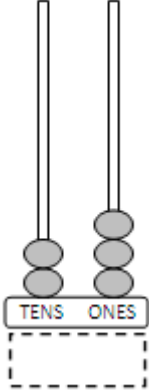
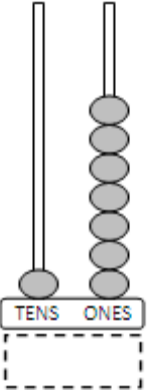
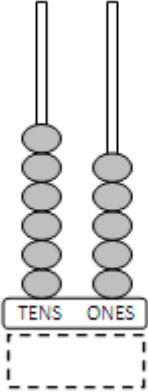
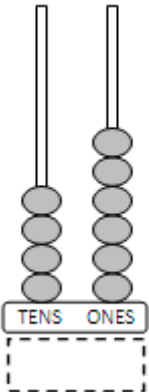
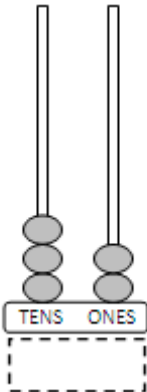
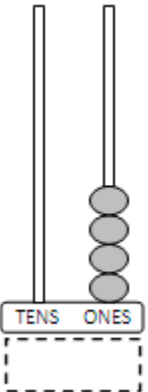
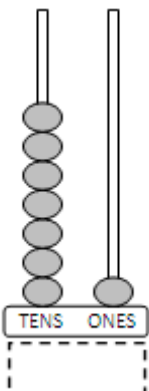
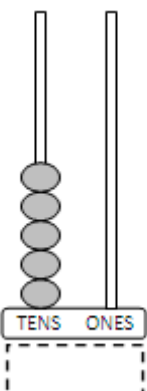
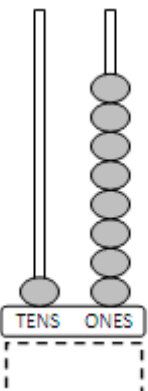
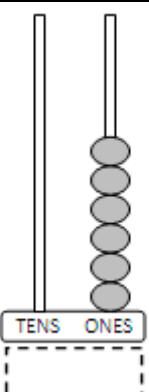
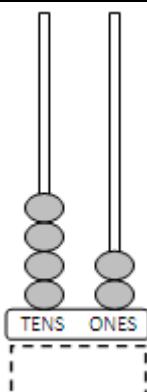
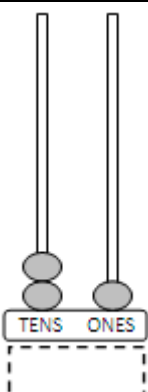


Abacus

Write the number shown on each abacus.

<p>1)</p>  <p>TENS ONES</p> <p>_____</p>	<p>2)</p>  <p>TENS ONES</p> <p>_____</p>	<p>3)</p>  <p>TENS ONES</p> <p>_____</p>
<p>4)</p>  <p>TENS ONES</p> <p>_____</p>	<p>5)</p>  <p>TENS ONES</p> <p>_____</p>	<p>6)</p>  <p>TENS ONES</p> <p>_____</p>
<p>7)</p>  <p>TENS ONES</p> <p>_____</p>	<p>8)</p>  <p>TENS ONES</p> <p>_____</p>	<p>9)</p>  <p>TENS ONES</p> <p>_____</p>
<p>10)</p>  <p>TENS ONES</p> <p>_____</p>	<p>11)</p>  <p>TENS ONES</p> <p>_____</p>	<p>12)</p>  <p>TENS ONES</p> <p>_____</p>