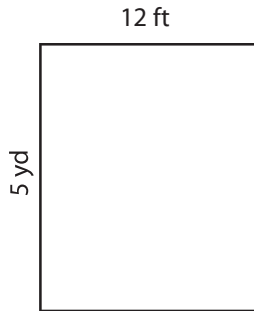


Perimeter of a Rectangle

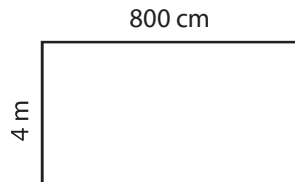
Find the perimeter of each rectangle.

1)



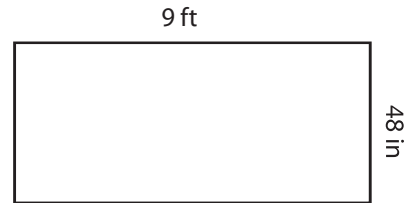
Perimeter = _____ yd

2)



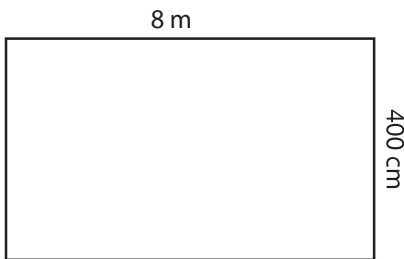
Perimeter = _____ m

3)



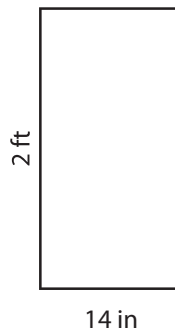
Perimeter = _____ ft

4)



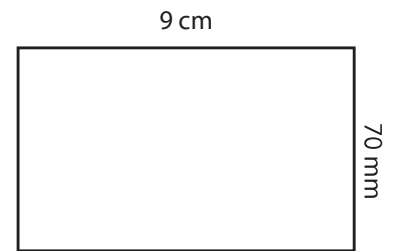
Perimeter = _____ m

5)



Perimeter = _____ in

6)



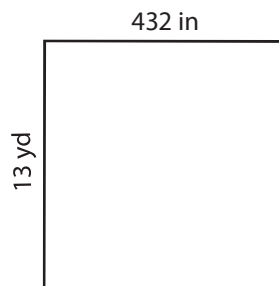
Perimeter = _____ cm

7)



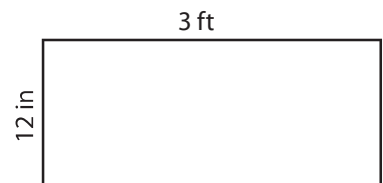
Perimeter = _____ m

8)



Perimeter = _____ yd

9)



Perimeter = _____ ft