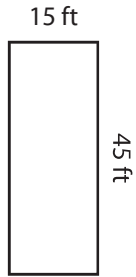


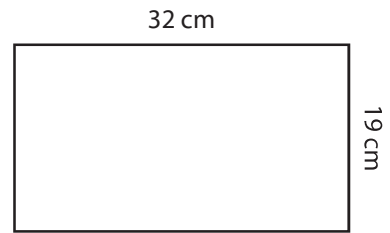
Find the perimeter of each rectangle.

1)



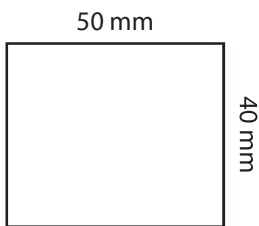
Perimeter =

2)



Perimeter =

3)



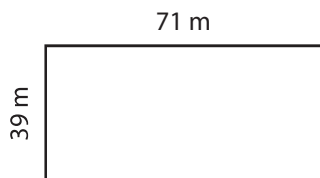
Perimeter =

4)



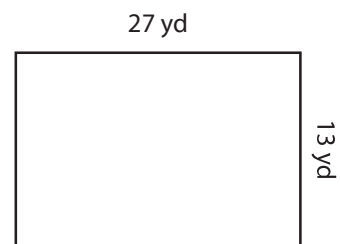
Perimeter =

5)



Perimeter =

6)



Perimeter =