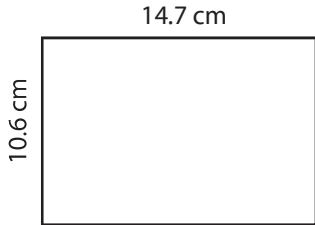


Perimeter of a Rectangle

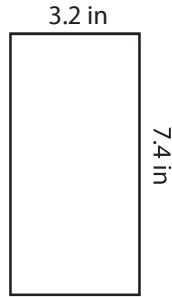
Find the perimeter of each rectangle.

1)



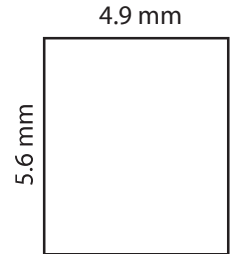
Perimeter =

2)



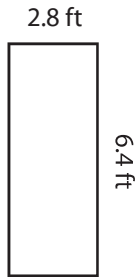
Perimeter =

3)



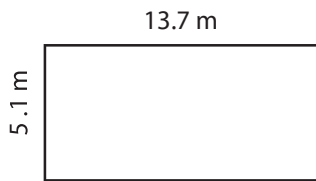
Perimeter =

4)




Perimeter =

5)



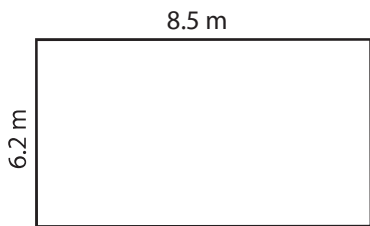
Perimeter =

6)



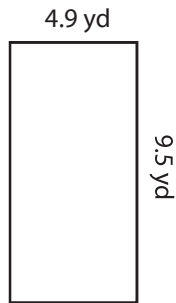
Perimeter =

7)



Perimeter =

8)



Perimeter =

9)



Perimeter =