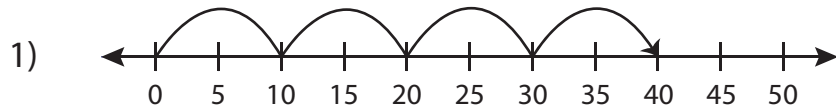


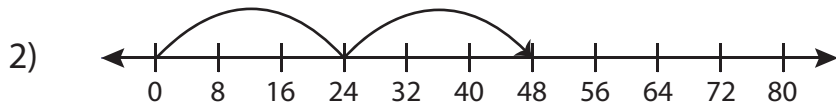
Number Line Multiplication

WS #2

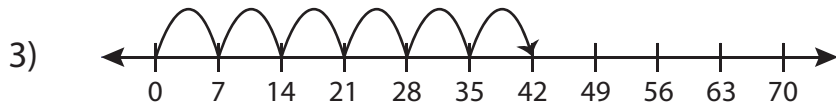
Match each number line to its equivalent multiplication sentence.



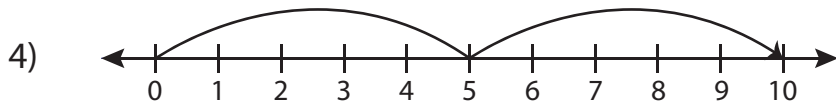
$2 \times 5 = 10$



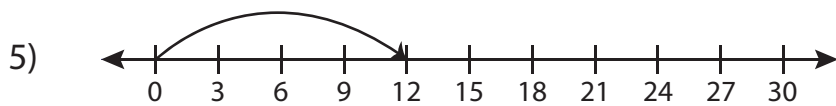
$6 \times 7 = 42$



$4 \times 10 = 40$



$1 \times 12 = 12$



$2 \times 24 = 48$