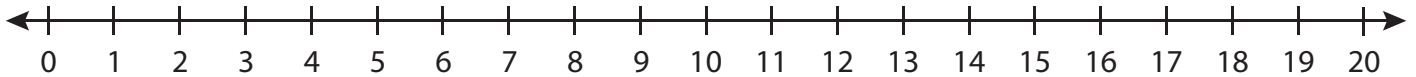


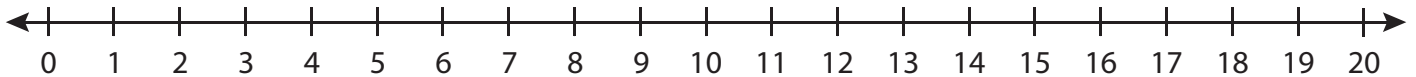
**Number Line Multiplication**

Indicate hops on each number line and complete the multiplication sentences.

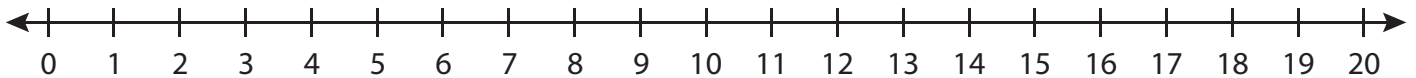
1)  $4 \times 5 =$  \_\_\_\_\_



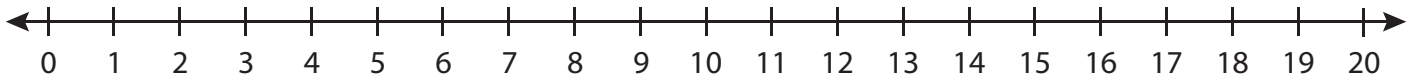
2)  $3 \times 4 =$  \_\_\_\_\_



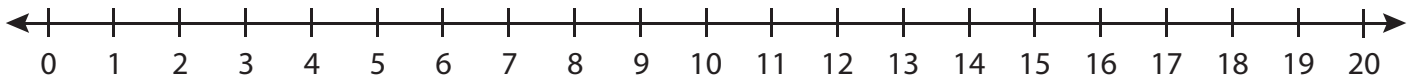
3)  $9 \times 1 =$  \_\_\_\_\_



4)  $7 \times 2 =$  \_\_\_\_\_



5)  $6 \times 3 =$  \_\_\_\_\_



6)  $2 \times 8 =$  \_\_\_\_\_

