


Equal Groups Multiplication


Write a multiplication equation to describe each model.

1)



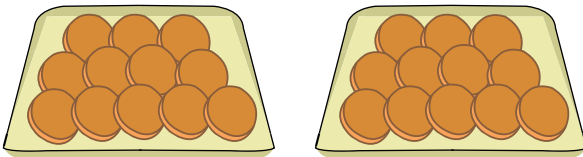
$$\underline{\quad} \times \underline{\quad} = \underline{\quad}$$

2)



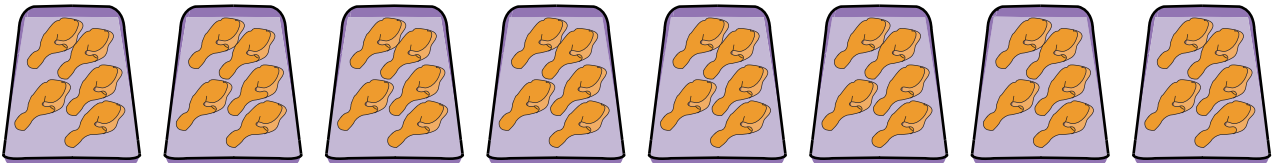
$$\underline{\quad} \times \underline{\quad} = \underline{\quad}$$

3)



$$\underline{\quad} \times \underline{\quad} = \underline{\quad}$$

4)



$$\underline{\quad} \times \underline{\quad} = \underline{\quad}$$

5)



$$\underline{\quad} \times \underline{\quad} = \underline{\quad}$$