


Equal Groups Multiplication

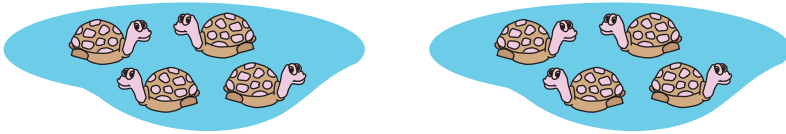
Complete the multiplication sentence that describes each model.

1)



$$\square \times 5 = 15$$

2)




$$\square \times 4 = 8$$

3)



$$7 \times \square = 14$$

4)



$$4 \times \square = 28$$

5)



$$\square \times 3 = 15$$