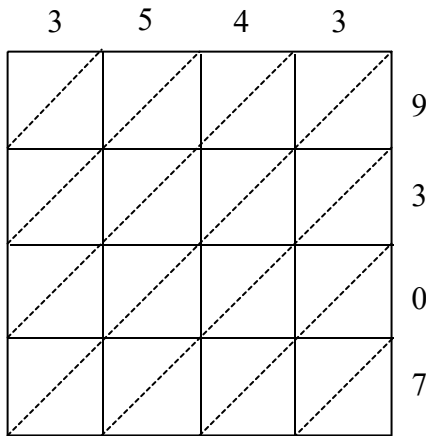
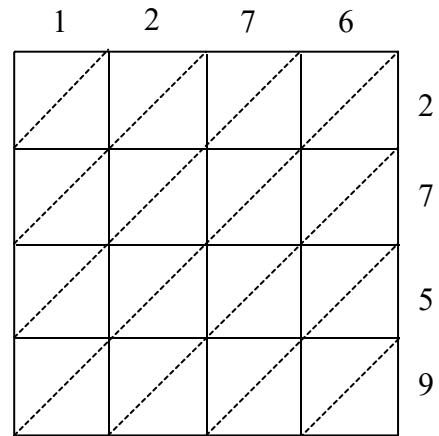


1) $3,543 \times 9,307$



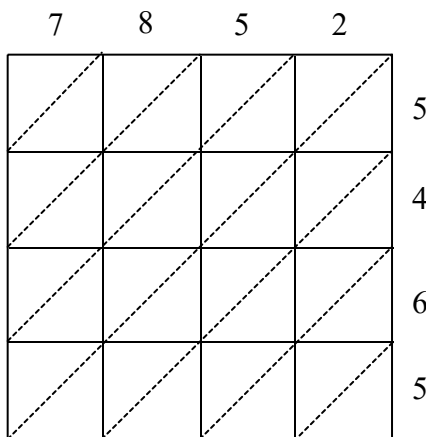
$3,543 \times 9,307 =$ _____

2) $1,276 \times 2,759$



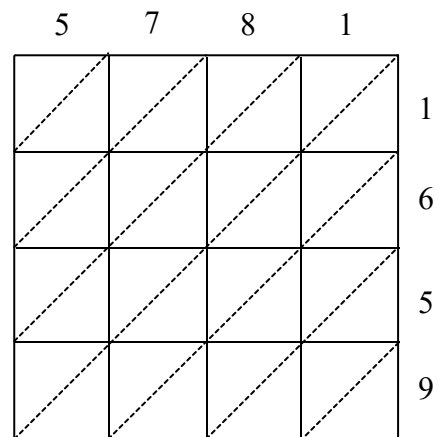
$1,276 \times 2,759 =$ _____

3) $7,852 \times 5,465$



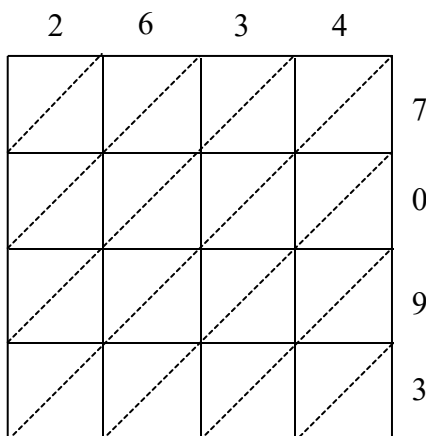
$7,852 \times 5,465 =$ _____

4) $5,781 \times 1,659$



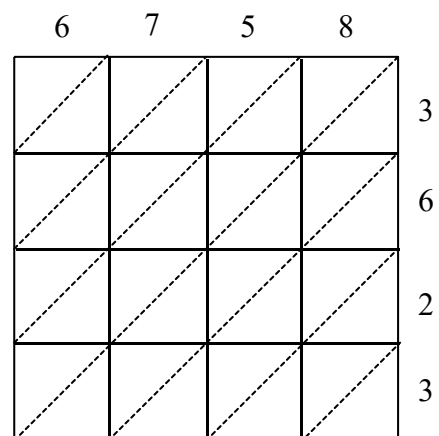
$5,781 \times 1,659 =$ _____

5) $2,634 \times 7,093$



$2,634 \times 7,093 =$ _____

6) $6,758 \times 3,623$



$6,758 \times 3,623 =$ _____