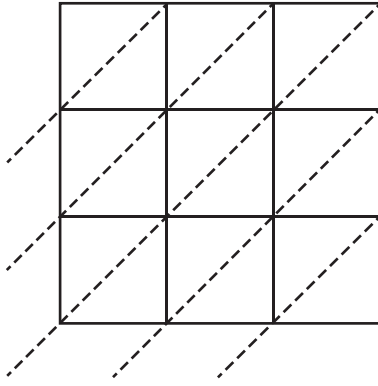


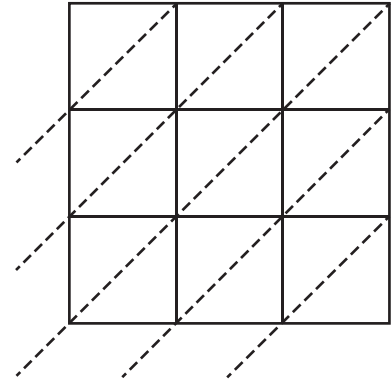
Use lattice multiplication method to find the product in each problem.

1) 820×546



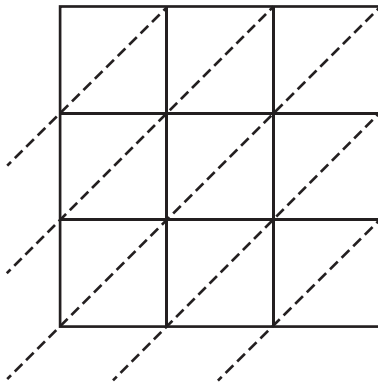
$820 \times 546 =$ _____

2) 164×372



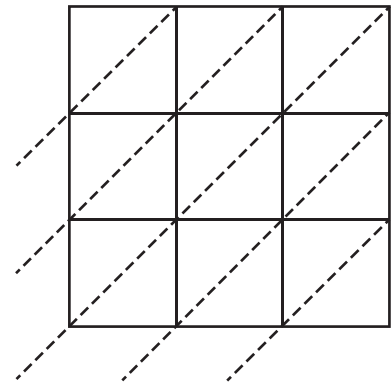
$164 \times 372 =$ _____

3) 316×950



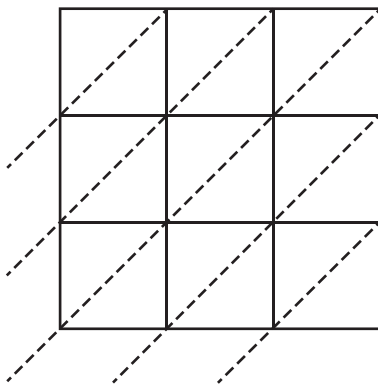
$316 \times 950 =$ _____

4) 752×294



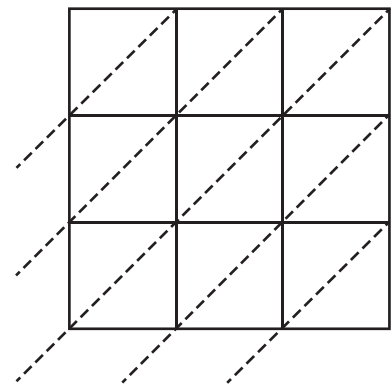
$752 \times 294 =$ _____

5) 678×481



$678 \times 481 =$ _____

6) 539×713



$539 \times 713 =$ _____