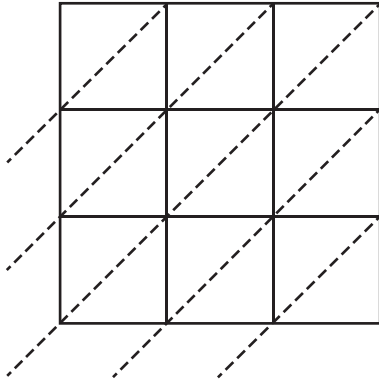


Lattice Multiplication

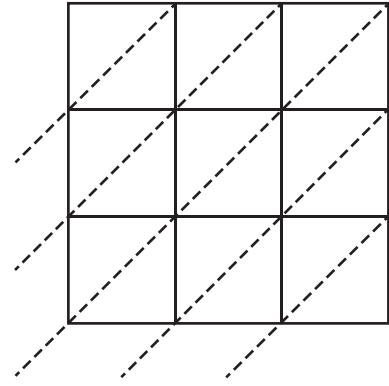
Use lattice multiplication method to find the product in each problem.

1) 756×495



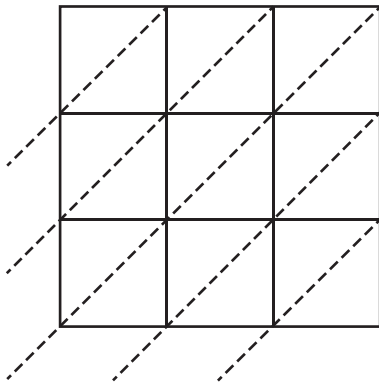
$756 \times 495 =$ _____

2) 291×649



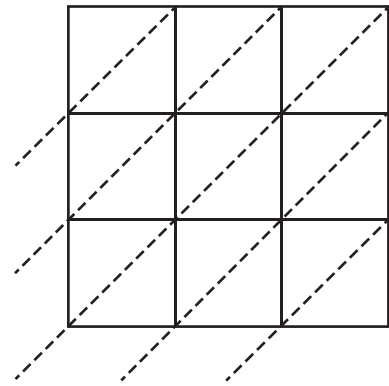
$291 \times 649 =$ _____

3) 157×864



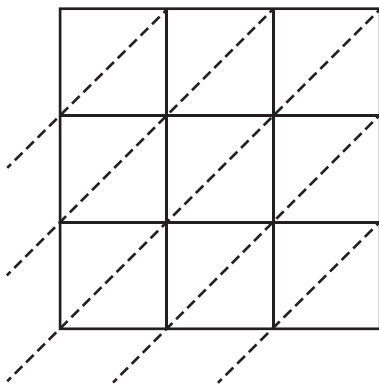
$157 \times 864 =$ _____

4) 921×508



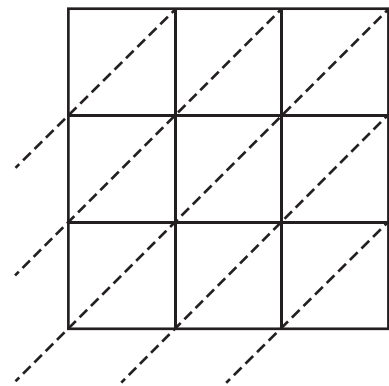
$921 \times 508 =$ _____

5) 420×936



$420 \times 936 =$ _____

6) 685×371



$685 \times 371 =$ _____