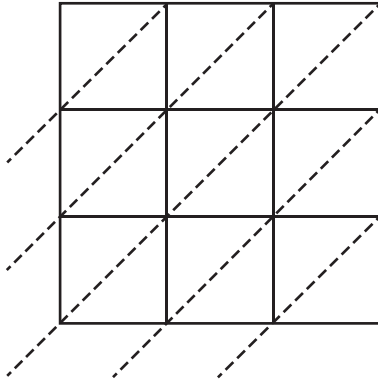


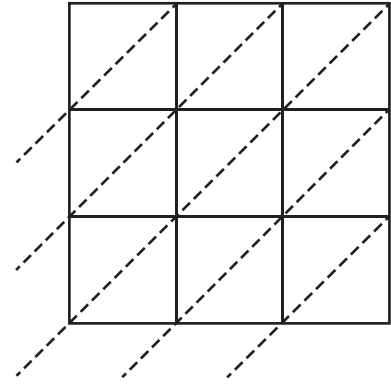
Use lattice multiplication method to find the product in each problem.

1)  $572 \times 643$



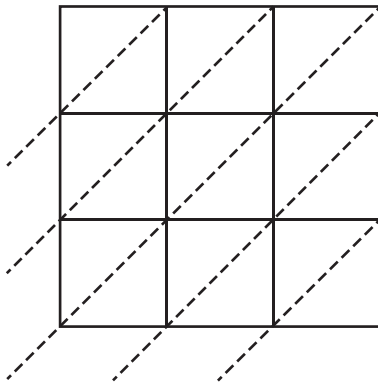
$572 \times 643 =$  \_\_\_\_\_

2)  $839 \times 167$



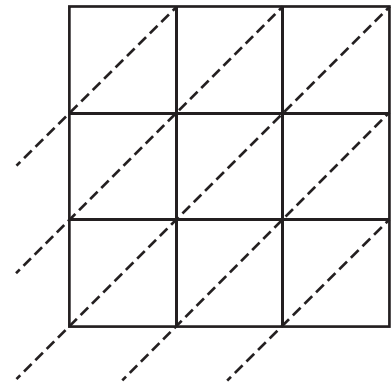
$839 \times 167 =$  \_\_\_\_\_

3)  $941 \times 354$



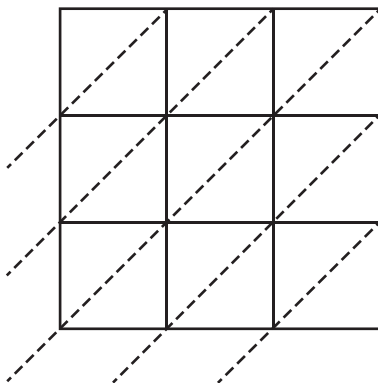
$941 \times 354 =$  \_\_\_\_\_

4)  $360 \times 759$



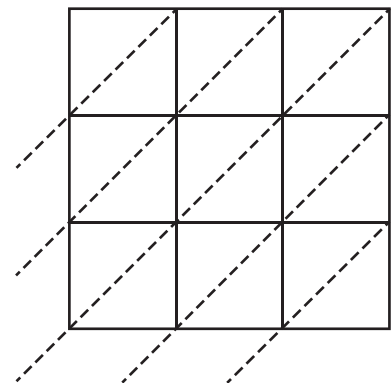
$360 \times 759 =$  \_\_\_\_\_

5)  $618 \times 491$



$618 \times 491 =$  \_\_\_\_\_

6)  $726 \times 238$



$726 \times 238 =$  \_\_\_\_\_