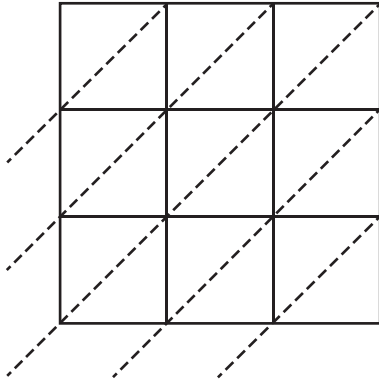


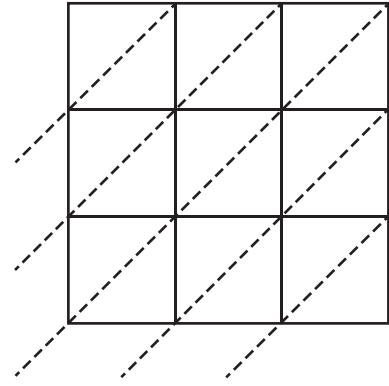
Use lattice multiplication method to find the product in each problem.

1) 459×372



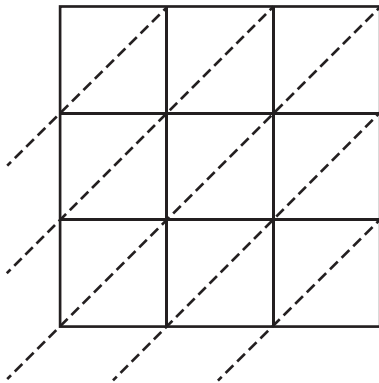
$459 \times 372 =$ _____

2) 934×750



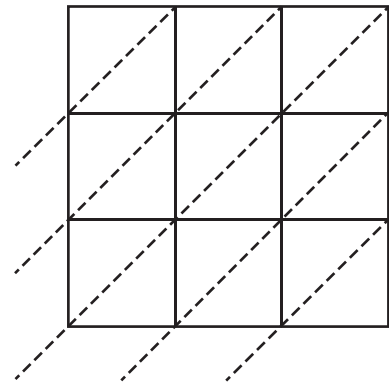
$934 \times 750 =$ _____

3) 520×815



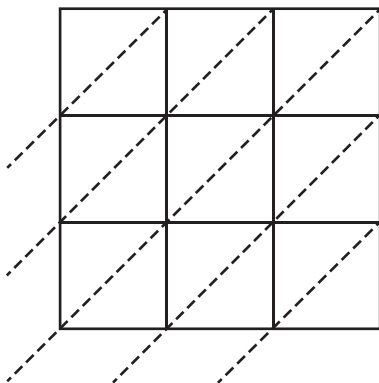
$520 \times 815 =$ _____

4) 241×493



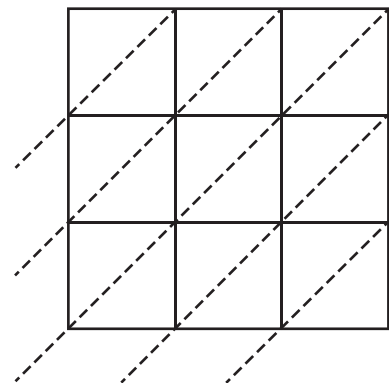
$241 \times 493 =$ _____

5) 862×201



$862 \times 201 =$ _____

6) 693×937



$693 \times 937 =$ _____