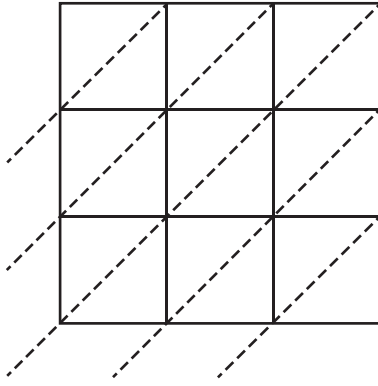


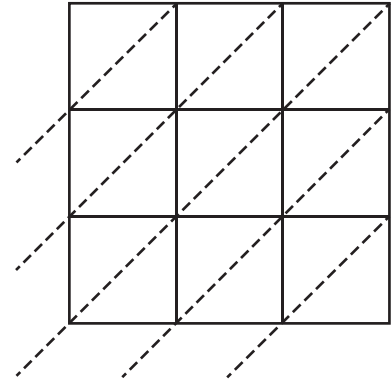
Use lattice multiplication method to find the product in each problem.

1)  $276 \times 814$



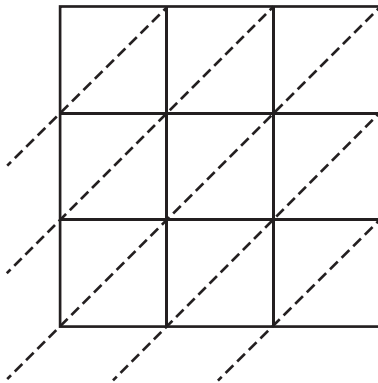
$276 \times 814 =$  \_\_\_\_\_

2)  $790 \times 153$



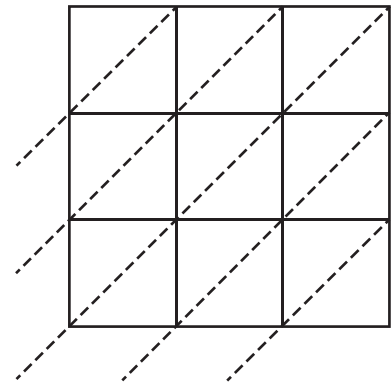
$790 \times 153 =$  \_\_\_\_\_

3)  $927 \times 340$



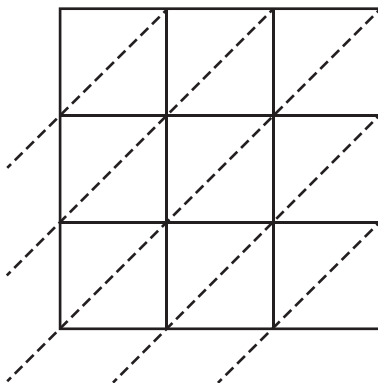
$927 \times 340 =$  \_\_\_\_\_

4)  $351 \times 228$



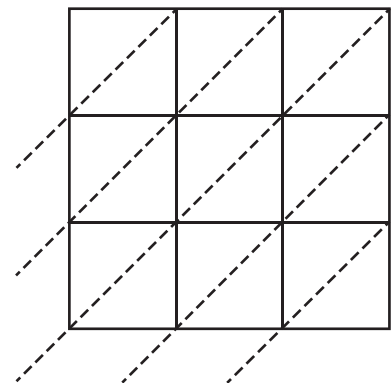
$351 \times 228 =$  \_\_\_\_\_

5)  $135 \times 593$



$135 \times 593 =$  \_\_\_\_\_

6)  $462 \times 617$



$462 \times 617 =$  \_\_\_\_\_