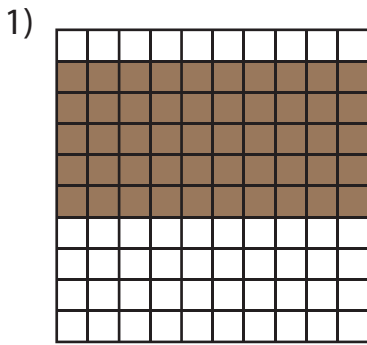
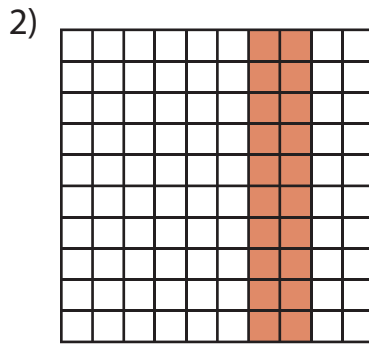


**Multiplication with Arrays**


A) Write a multiplication sentence for each model.



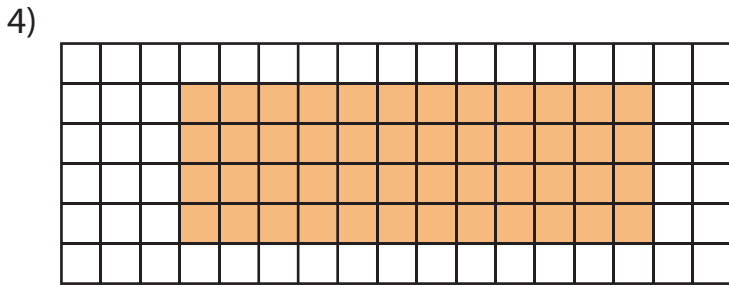
\_\_\_ × \_\_\_ = \_\_\_



\_\_\_ × \_\_\_ = \_\_\_




\_\_\_ × \_\_\_ = \_\_\_




\_\_\_ × \_\_\_ = \_\_\_

B) Draw an area model to solve each multiplication sentence.


1)  $10 \times 6 =$  \_\_\_



2)  $7 \times 10 =$  \_\_\_



3)  $11 \times 8 =$  \_\_\_



4)  $3 \times 11 =$  \_\_\_

