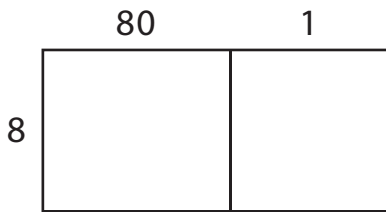


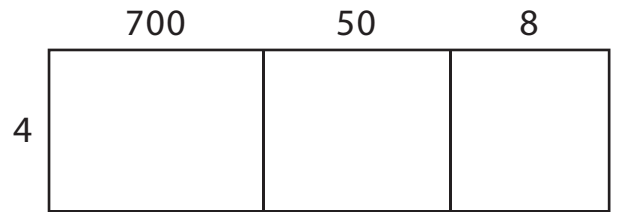
Area Model Multiplication

A) Find the product using the area model.

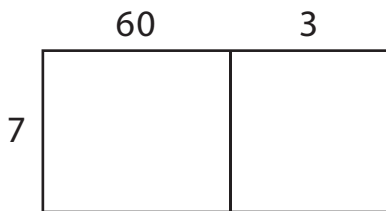
1) $81 \times 8 =$ _____



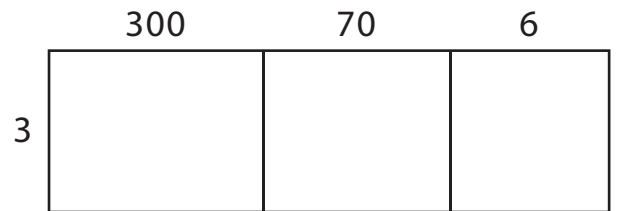
2) $758 \times 4 =$ _____



3) $63 \times 7 =$ _____




4) $376 \times 3 =$ _____




B) Use the area model and complete each multiplication sentence.


1) $287 \times 9 =$ _____



2) $90 \times 6 =$ _____



3) $179 \times 2 =$ _____



4) $44 \times 5 =$ _____

