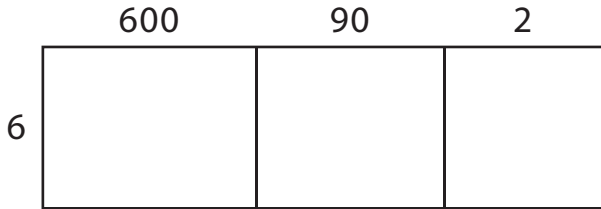


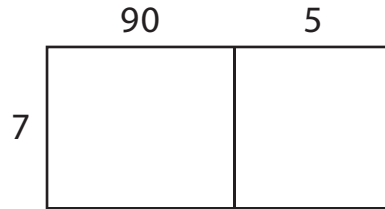
Area Model Multiplication

A) Find the product using the area model.

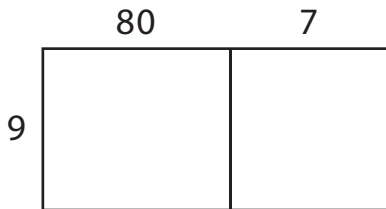
1) $692 \times 6 =$ _____



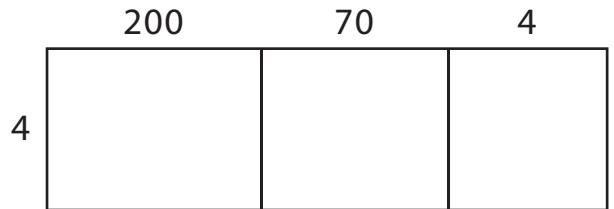
2) $95 \times 7 =$ _____



3) $87 \times 9 =$ _____




4) $274 \times 4 =$ _____



B) Use the area model and complete each multiplication sentence.


1) $53 \times 3 =$ _____



2) $389 \times 8 =$ _____



3) $491 \times 5 =$ _____



4) $18 \times 2 =$ _____

