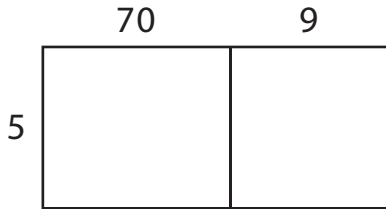


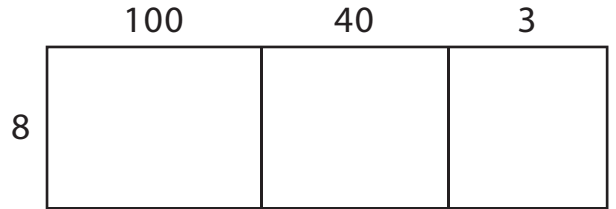
Area Model Multiplication

A) Find the product using the area model.

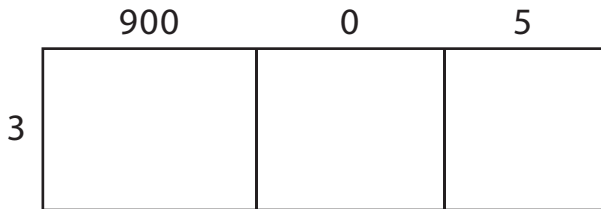
1) $79 \times 5 =$ _____



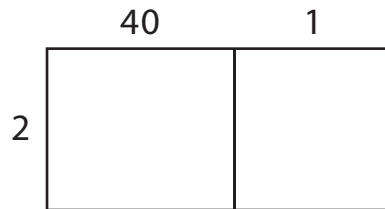
2) $143 \times 8 =$ _____



3) $905 \times 3 =$ _____




4) $41 \times 2 =$ _____




B) Use the area model and complete each multiplication sentence.


1) $817 \times 6 =$ _____



2) $24 \times 9 =$ _____



3) $36 \times 4 =$ _____



4) $568 \times 7 =$ _____

