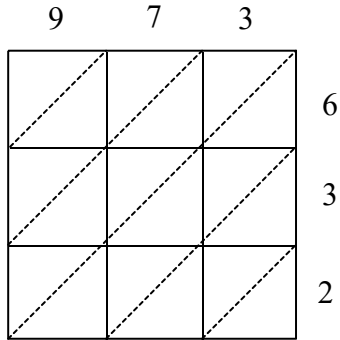


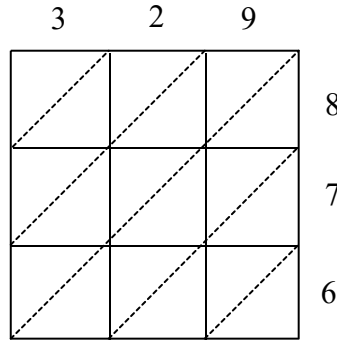
Lattice Multiplication

1) 973×632



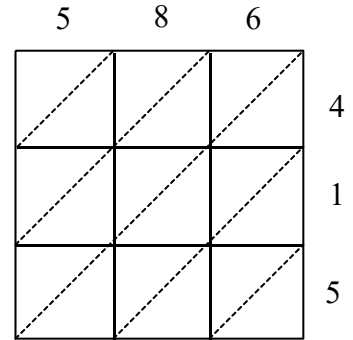
$973 \times 632 =$ _____

2) 329×876



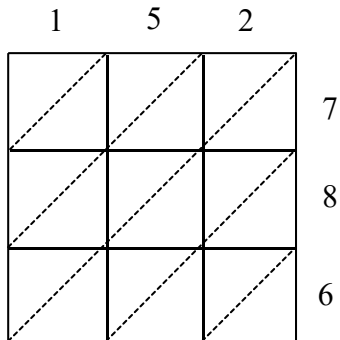
$329 \times 876 =$ _____

3) 586×415



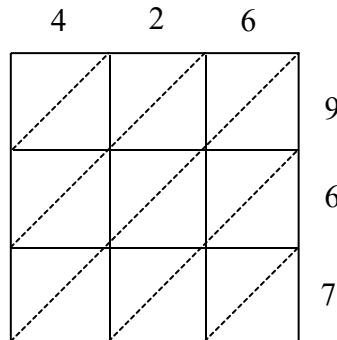
$586 \times 415 =$ _____

4) 152×786



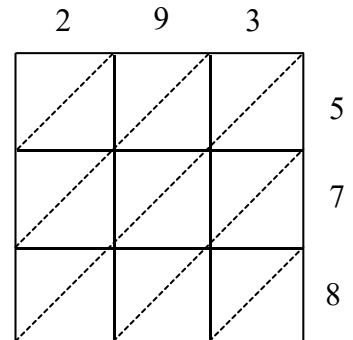
$152 \times 786 =$ _____

5) 426×967



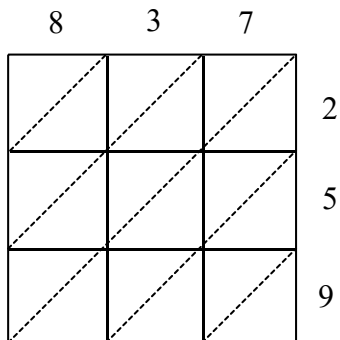
$426 \times 967 =$ _____

6) 293×578



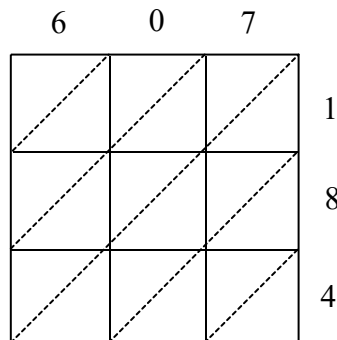
$293 \times 578 =$ _____

7) 837×259



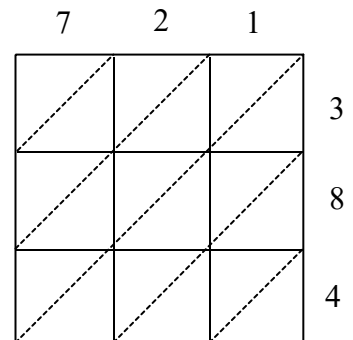
$837 \times 259 =$ _____

8) 607×184



$607 \times 184 =$ _____

9) 721×384



$721 \times 384 =$ _____