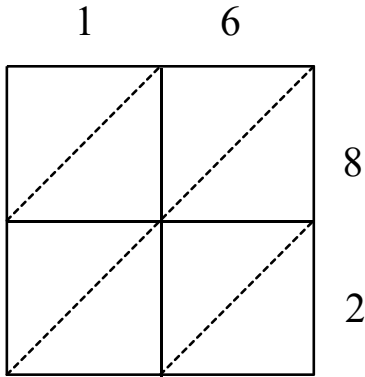


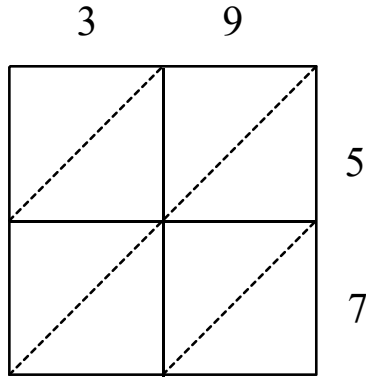
Lattice Multiplication

1) 16×82



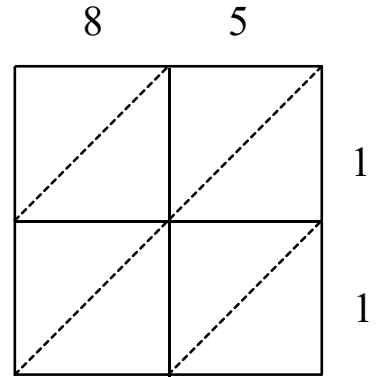
$16 \times 82 =$ _____

2) 39×57



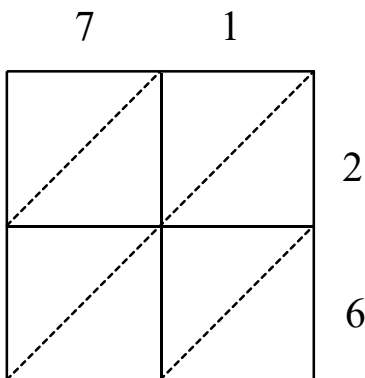
$39 \times 57 =$ _____

3) 85×11



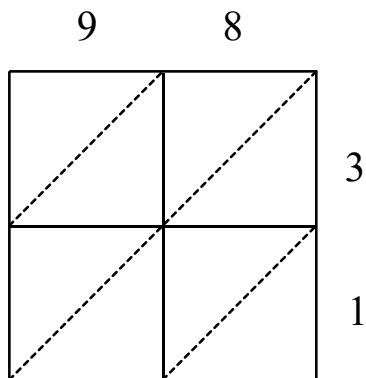
$85 \times 11 =$ _____

4) 71×26



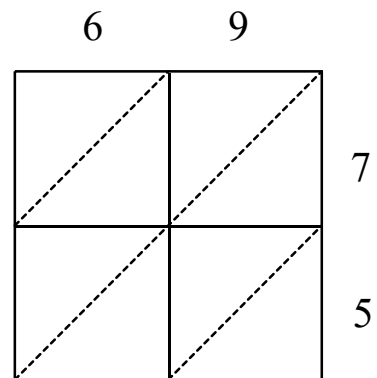
$71 \times 26 =$ _____

5) 98×31



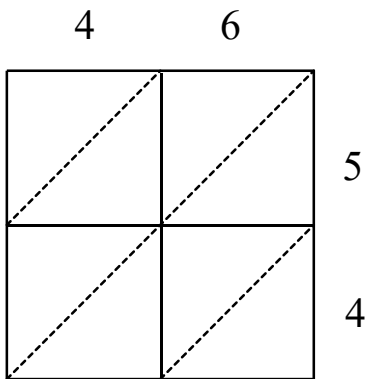
$98 \times 31 =$ _____

6) 69×75



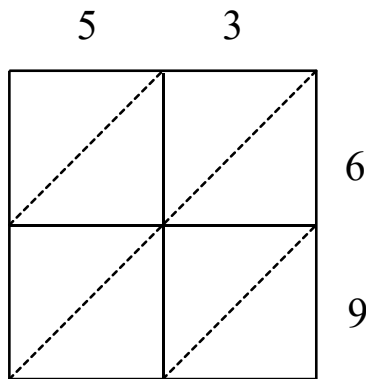
$69 \times 75 =$ _____

7) 46×54



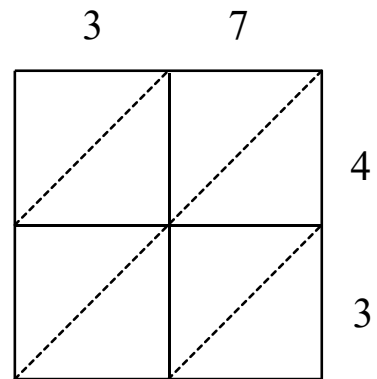
$46 \times 54 =$ _____

8) 53×69



$53 \times 69 =$ _____

9) 37×43



$37 \times 43 =$ _____