





Counting Quarters and Half-Dollars

Count the coins and write the total amount.

<p>1) </p>	<p>\$ _____</p>
<p>2) </p>	<p>\$ _____</p>
<p>3) </p>	<p>\$ _____</p>
<p>4) </p>	<p>\$ _____</p>
<p>5) 5 half-dollars = \$ _____</p> <p>6) 10 quarters = \$ _____</p>	

7) How many quarters do you need to buy a handbag costs \$1.75?

_____ quarters

8) Emma bought a dress with 6 half-dollars. How much money did she pay?

\$ _____