





Counting Quarters and Half-Dollars

Count the coins and write the total amount.

<p>1)</p> 	<p>\$ _____</p>
<p>2)</p> 	<p>\$ _____</p>
<p>3)</p> 	<p>\$ _____</p>
<p>4)</p> 	<p>\$ _____</p>
<p>5) 6 quarters = \$ _____</p> <p>6) 8 half-dollars = \$ _____</p>	

7) How many quarters do you need to buy a notebook costs \$2.00?

_____ quarters

8) Ronald bought an eraser with 3 half-dollars. How much money did he pay?

\$ _____