





Counting Quarters and Half-Dollars

Count the coins and write the total amount.

<p>1) </p>	<p>\$ _____</p>
<p>2) </p>	<p>\$ _____</p>
<p>3) </p>	<p>\$ _____</p>
<p>4) </p>	<p>\$ _____</p>
<p>5) 7 half-dollars = \$ _____</p> <p>6) 10 quarters = \$ _____</p>	

7) How many half-dollars do you need to buy a stapler costs \$4.00?

_____ half-dollars

8) Adam bought a wooden pushpin with 9 quarters. How much money did he pay?

\$ _____