





Counting Pennies, Nickels, and Dimes

Count the coins and write the total amount.

<p>1) </p>	<p>_____ ¢</p>
<p>2) </p>	<p>_____ ¢</p>
<p>3) </p>	<p>_____ ¢</p>
<p>4) </p>	<p>_____ ¢</p>
<p>5) 10 pennies = _____ ¢ 6) 6 dimes = _____ ¢</p>	

7) Mathew had 20 pennies in his money bank. How much money did he have?

_____ ¢

8) If a pair of scissors costs 30 ¢, how many dimes do you need to buy it?

_____ dimes