





Counting Pennies, Nickels, and Dimes

Count the coins and write the total amount.

<p>1) </p>	<p>_____ ¢</p>
<p>2) </p>	<p>_____ ¢</p>
<p>3) </p>	<p>_____ ¢</p>
<p>4) </p>	<p>_____ ¢</p>
<p>5) 9 nickels = _____ ¢</p>	<p>6) 7 pennies = _____ ¢</p>

7) Robin had 9 pennies in his piggybank. How much money did he have?

_____ ¢

8) If a pair of socks costs 50¢, how many nickels do you need to buy it?

_____ nickels