

Counting Pennies

Count the pennies in each piggy bank and write the total value in cents.




_____ ¢



_____ ¢




_____ ¢



_____ ¢




_____ ¢



_____ ¢



_____ ¢




_____ ¢




_____ ¢



_____ ¢



_____ ¢



_____ ¢