





Counting Nickels



Count the nickels and write the total amount.

<p>1) </p>	<p>_____ ¢</p>
<p>2) </p>	<p>_____ ¢</p>
<p>3) </p>	<p>_____ ¢</p>
<p>4) </p>	<p>_____ ¢</p>
<p>5) 4 nickels = _____ ¢</p> <p>6) 9 nickels = _____ ¢</p>	

7) Shirley had 5 nickels in her wallet. How much money did she have?

_____ ¢

8) Joyce had 50¢ in her wallet. If she had all the coins in nickel, how many nickels did she have?

_____ nickels