





Counting Half-Dollars



Count the half-dollars and write the total amount.

<p>1) </p>	<p>\$ _____</p>
<p>2) </p>	<p>\$ _____</p>
<p>3) </p>	<p>\$ _____</p>
<p>4) </p>	<p>\$ _____</p>
<p>5) 8 half-dollars = \$ _____ 6) 6 half-dollars = \$ _____</p>	

7) A pen costs \$ 5.00. How many half-dollars do you need to buy it?

_____ half-dollars

8) John bought a cupcake with 9 half-dollars. How much money did he pay?

\$ _____