





# Counting Half-Dollars



Count the half-dollars and write the total amount.

<p>1) </p>	<p>\$ _____</p>
<p>2) </p>	<p>\$ _____</p>
<p>3) </p>	<p>\$ _____</p>
<p>4) </p>	<p>\$ _____</p>
<p>5) 7 half-dollars = \$ _____      6) 9 half-dollars = \$ _____</p>	

7) A car toy costs \$2.00. How many half-dollars do you need to buy it?

\_\_\_\_\_ half-dollars

8) Peter bought a hat with 8 half-dollars. How much money did he pay?

\$ \_\_\_\_\_