





# Counting Dimes



Count the dimes and write the total amount.

<p>1) </p>	<p>_____ ¢</p>
<p>2) </p>	<p>_____ ¢</p>
<p>3) </p>	<p>_____ ¢</p>
<p>4) </p>	<p>_____ ¢</p>
<p>5) 7 dimes = _____ ¢</p> <p>6) 9 dimes = _____ ¢</p>	

7) If you buy a whale toy with 6 dimes, how much money will you pay?

\_\_\_\_\_ ¢

8) If a turtle toy costs 20¢, how many dimes do you need to buy it?

\_\_\_\_\_ dimes