






Counting Dimes



Count the dimes and write the total amount.

<p>1) </p>	<p>_____ ¢</p>
<p>2) </p>	<p>_____ ¢</p>
<p>3) </p>	<p>_____ ¢</p>
<p>4) </p>	<p>_____ ¢</p>
<p>5) 9 dimes = _____ ¢</p>	<p>6) 3 dimes = _____ ¢</p>

7) If you buy a boat toy with 8 dimes, how much money will you pay?

_____ ¢

8) If a train toy costs 50¢, how many dimes do you need to buy it?

_____ dimes