





Counting Dimes



Count the dimes and write the total amount.

<p>1) </p>	<p>_____ ¢</p>
<p>2) </p>	<p>_____ ¢</p>
<p>3) </p>	<p>_____ ¢</p>
<p>4) </p>	<p>_____ ¢</p>
<p>5) 6 dimes = _____ ¢ 6) 9 dimes = _____ ¢</p>	

7) If you buy a horse toy with 3 dimes, how much money will you pay?

_____ ¢

8) If a dog toy costs 80 ¢, how many dimes do you need to buy it?

_____ dimes