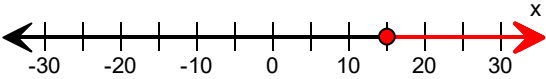
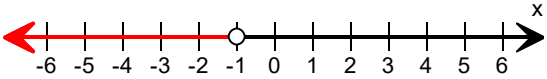
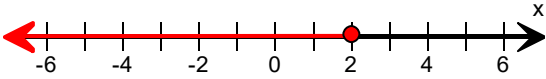
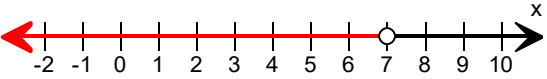
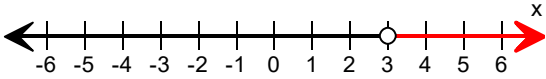

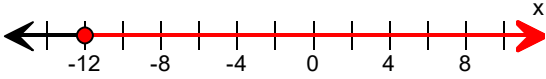
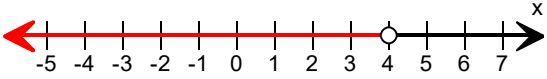
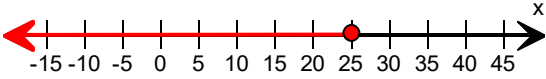
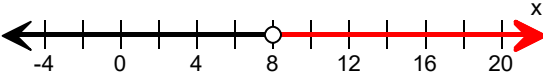


Writing Inequalities

Write the inequality that describes the graph.

<p>1)</p>  <p>Inequality:</p>	<p>2)</p>  <p>Inequality:</p>
<p>3)</p>  <p>Inequality:</p>	<p>4)</p>  <p>Inequality:</p>
<p>5)</p>  <p>Inequality:</p>	<p>6)</p>  <p>Inequality:</p>
<p>7)</p>  <p>Inequality:</p>	<p>8)</p>  <p>Inequality:</p>
<p>9)</p>  <p>Inequality:</p>	<p>10)</p>  <p>Inequality:</p>