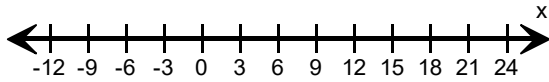
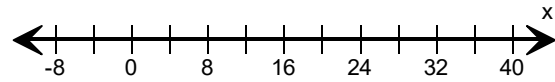


Solve each inequality and graph the solutions.

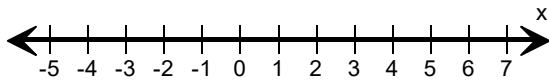
1) $x - 2 < 13$



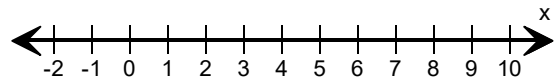
2) $\frac{x}{4} \geq 6$



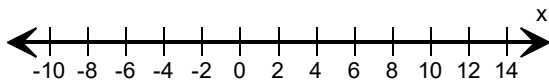
3) $x + 2 \leq 7$



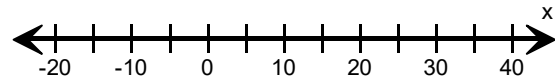
4) $5x > 25$



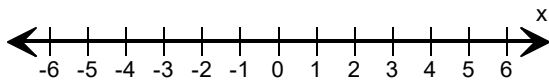
5) $x + 10 < 18$



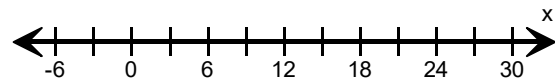
6) $\frac{x}{5} \leq 4$



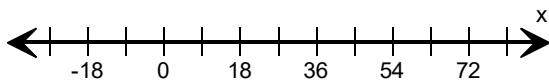
7) $5x \leq 15$



8) $x - 8 > 4$



9) $\frac{x}{9} > 3$



10) $x + 12 \geq 24$

