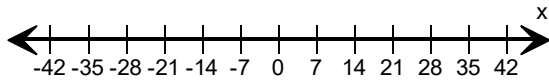
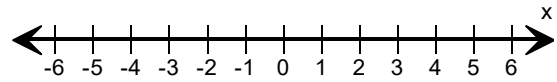


Graph the inequality.

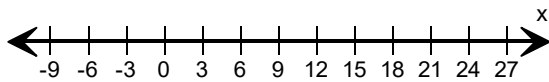
1)  $x \leq -7$



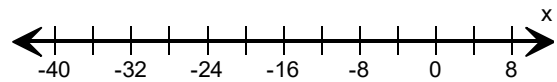
2)  $x > 1$



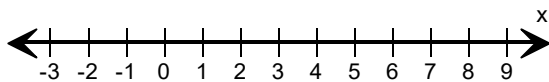
3)  $x > 9$



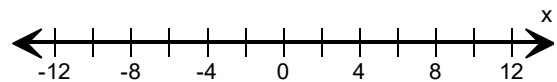
4)  $x \leq -16$



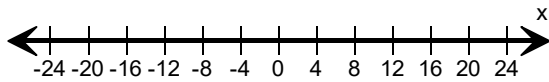
5)  $x \geq 6$



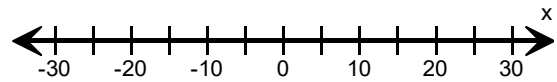
6)  $x \leq 4$



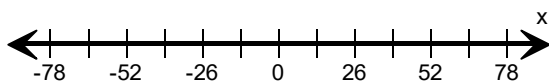
7)  $x \geq -4$



8)  $x < 10$



9)  $x \geq -13$



10)  $x > -2$

