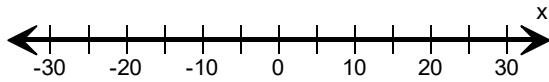
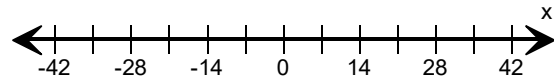


Graph the inequality.

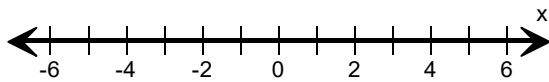
1) $x \geq 5$



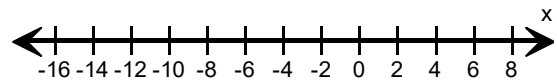
2) $x < 7$



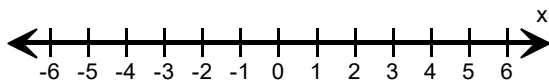
3) $x \geq 2$



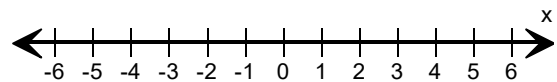
4) $x \leq -6$



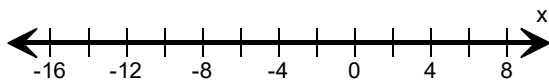
5) $x < -1$



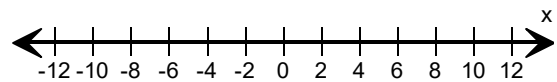
6) $x \geq 3$



7) $x \leq -8$



8) $x < 6$



9) $x > -3$



10) $x \geq -12$

