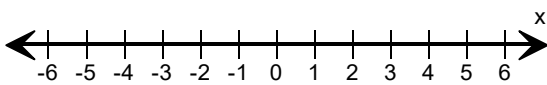
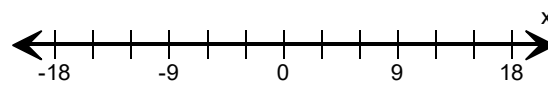
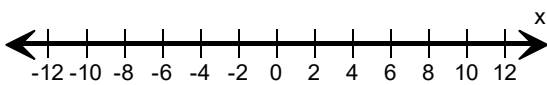

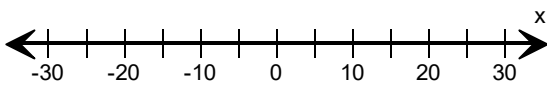
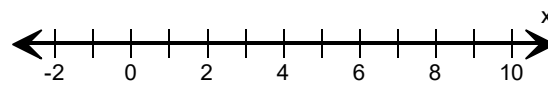
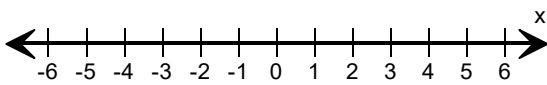
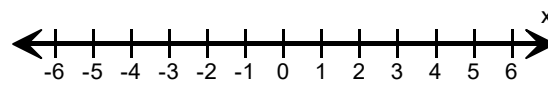
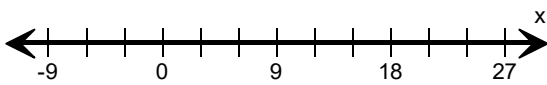


Graph the inequality.

<p>1) $x > 1$</p> 	<p>2) $x \leq 9$</p> 
<p>3) $x \leq -2$</p> 	<p>4) $x \geq 21$</p> 
<p>5) $x > 10$</p> 	<p>6) $x \geq 6$</p> 
<p>7) $x \leq 3$</p> 	<p>8) $x > -2$</p> 
<p>9) $x \geq 9$</p> 	<p>10) $x \leq 5$</p> 