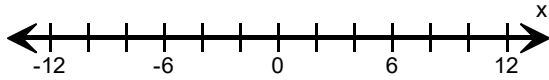
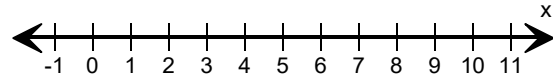


Graph the inequality.

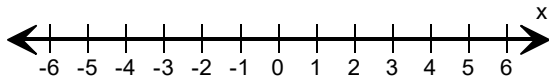
1) $x \leq 6$



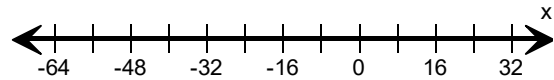
2) $x > 7$



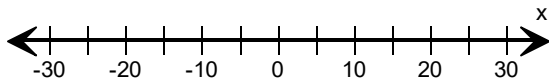
3) $x < 3$



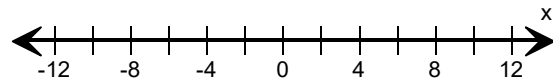
4) $x \leq -32$



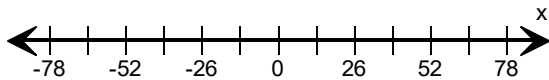
5) $x \geq 15$



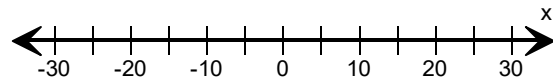
6) $x > 4$



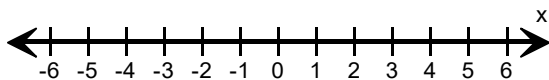
7) $x \leq 13$



8) $x \geq 10$



9) $x \leq -2$



10) $x < 39$

