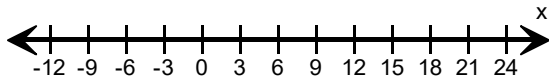
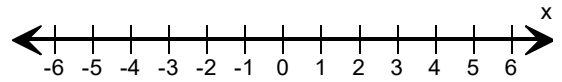


Graph the inequality.

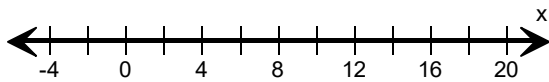
1) $x < 15$



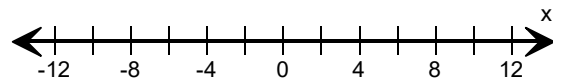
2) $x \geq -3$



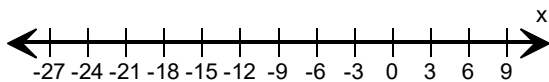
3) $x > 8$



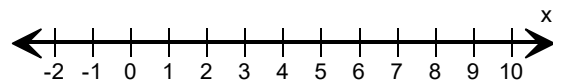
4) $x \leq 4$



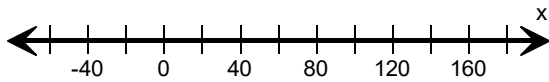
5) $x < -9$



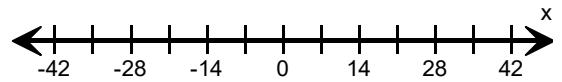
6) $x > 5$



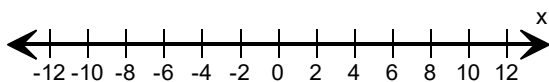
7) $x \leq 100$



8) $x \geq 14$



9) $x > 2$



10) $x \leq 7$

